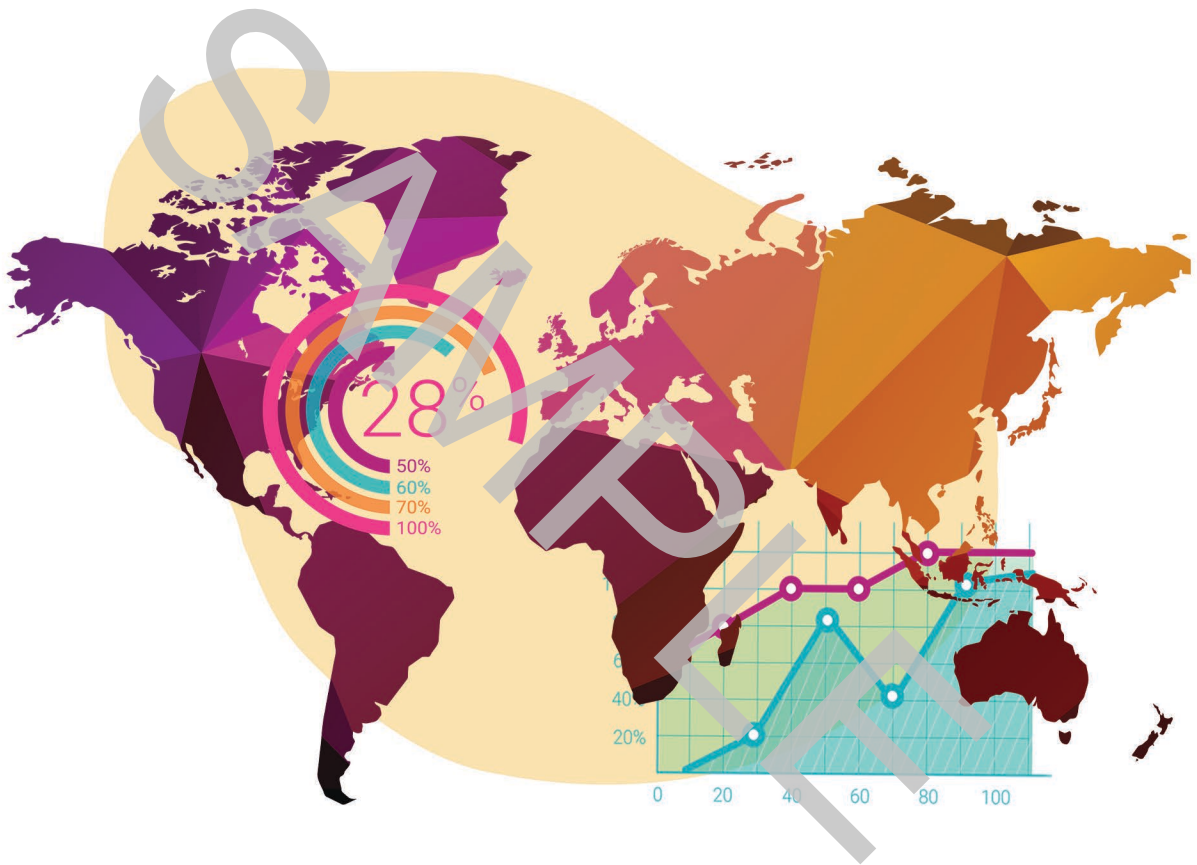




MAPS, GRAPHS, AND CHARTS



Grades 7 - 8 Practice Packet



UIL Maps, Graphs & Charts

Practice Packet

for

7th - 8th Grades

Written by
Shannon Barker and Nancy Barnard

Edited by
Beth Mader

Copyright © 2020 by Hexco Academic. All rights reserved. Reproduction or translation of any part of this work beyond that permitted by Section 107 or 108 of the 1976 *United States Copyright Act* without the permission of the copyright owner is unlawful. Exception/permission for photocopies granted by Hexco Academic is only applicable for *Practice Packets* and *Invitational Tests* as these products are expressly written for group or classroom testing. *Invitational Tests* may not be shared with other schools or districts before testing due to the confidential nature of the represented competitions.

We are a small company that listens! If you have any questions or if there is an area that you would like fully explored, let us hear from you. We hope you enjoy this product and stay in contact with us throughout your academic journey.

~ President Hexco Inc., Linda Tarrant

HEXCO ACADEMIC
www.hexco.com
P.O. Box 199 • Hunt, Texas 78024
Phone: 800.391.2891 • Fax: 830.367.3824
Email: hexco@hexco.com

IF YOU LIKE THIS PRODUCT, WE ALSO RECOMMEND

Maps, Graphs & Charts Concepts Book
Maps, Graphs & Charts PowerPoint
Maps, Graphs & Charts Practice Packet 1
Maps, Graphs & Charts eMentor

Maps, Graphs & Charts Practice Packet

Grades 7 - 8



CONTENTS

Six Sets of Tests (A-F)

Each Test Includes:

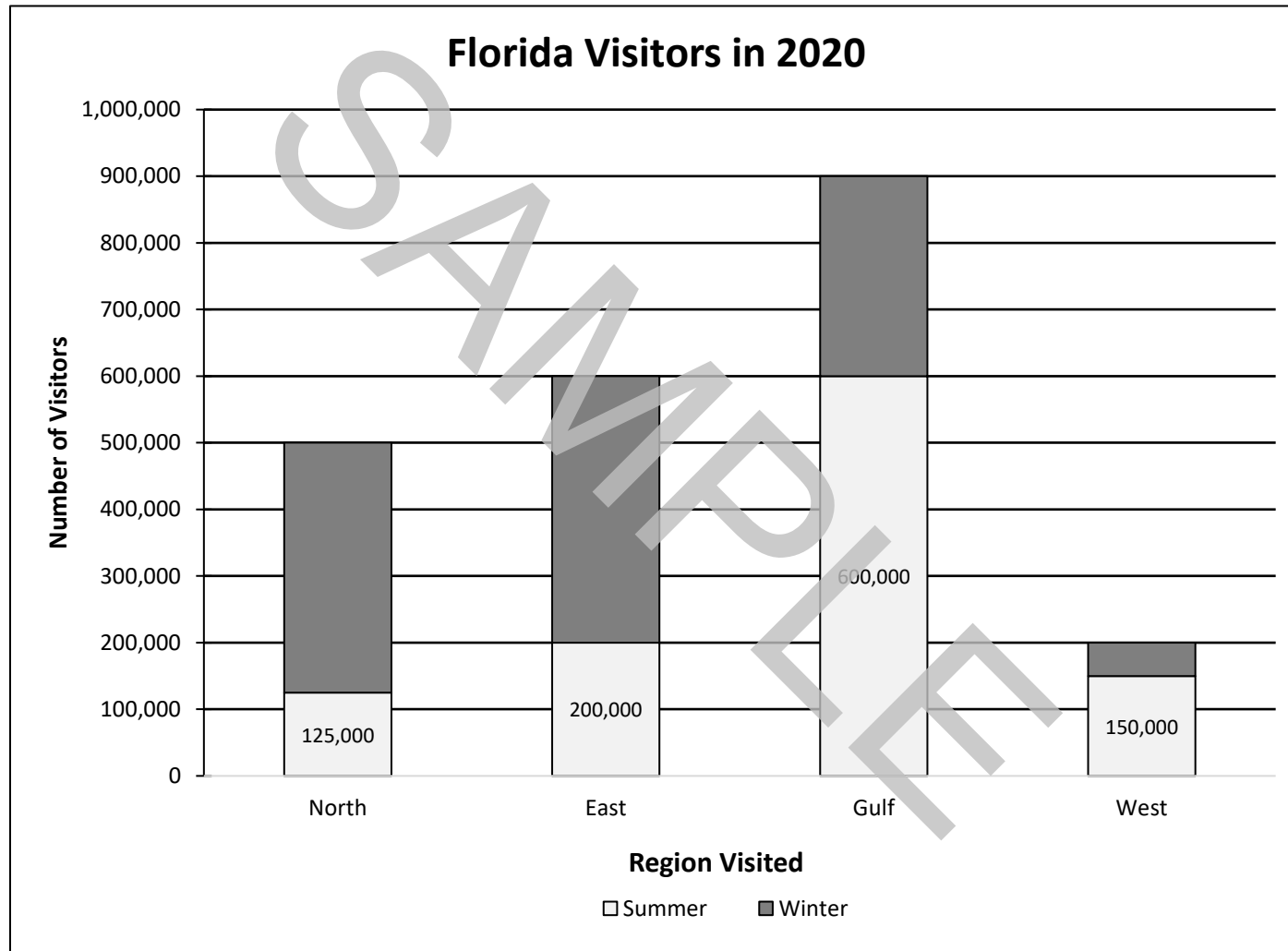
- 75 Questions

Each Packet Includes:

- One Answer Sheet (blank)
- Answer Keys

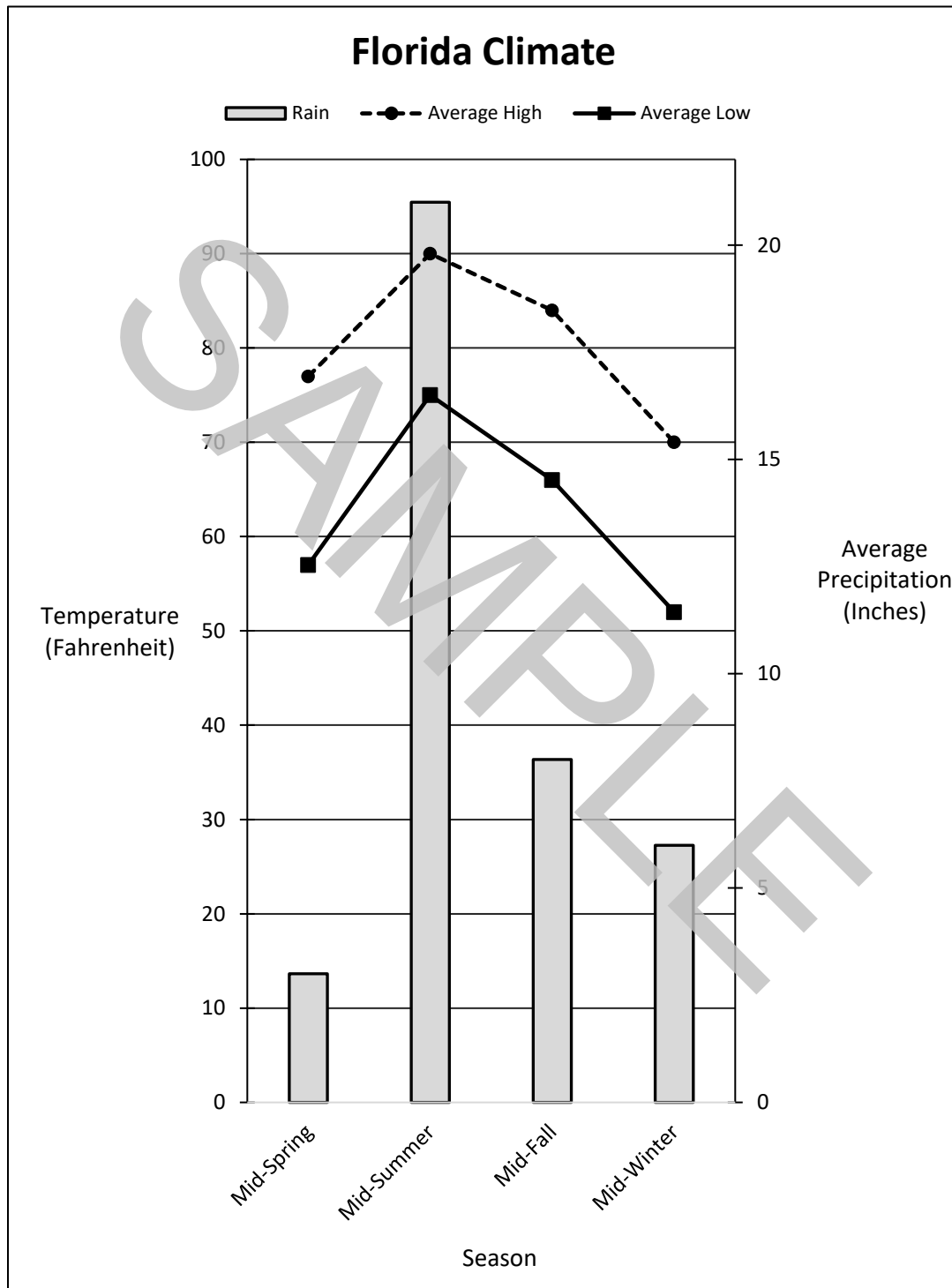
For official UIL Constitution and Contest Rules for Maps, Graphs & Charts, please review the Section 920 document at:

<http://www.uiltexas.org/aplus/events/aplus-maps-graphs-charts>



Florida Visitors

16. What does the x-axis represent?
- A. Number of Visitors
 - B. Season
 - C. Region Visited
 - D. State Average
17. How many regions are shown?
- A. one
 - B. two
 - C. three
 - D. four
18. Which region had the least number of visitors in the Winter?
- A. North
 - B. East
 - C. Gulf
 - D. West
19. How many total visitors visited the North and West regions during the Summer?
- A. 700,000
 - B. 725,000
 - C. 850,000
 - D. 925,000
20. Which region had 200,000 visitors in the Summer?
- A. North
 - B. East
 - C. Gulf
 - D. West
21. What was the total number of visitors in the East region during the Winter?
- A. 200,000
 - B. 400,000
 - C. 500,000
 - D. 600,000
22. How many regions had less than 500,000 visitors in the Summer?
- A. one
 - B. two
 - C. three
 - D. four
23. How many total visitors visited the North region?
- A. 200,000
 - B. 500,000
 - C. 600,000
 - D. 900,000
24. How many regions had more than 300,000 visitors in both Winter and Summer?
- A. one
 - B. two
 - C. three
 - D. four
25. How many more visitors visited the Gulf region than the East region?
- A. 200,000
 - B. 300,000
 - C. 600,000
 - D. 900,000
- TRUE/FALSE**
26. Only one region had more than 400,000 visitors in the Summer.
27. The West region had 200,000 total visitors.
28. Florida had over 1,000,000 total visitors in the Summer.
29. There were more visitors in the Summer than in the Winter.
30. The East region had the most visitors than all the other regions.



North America

46. What city lies at 30°N 90°W?
 A. New Orleans
 B. Nashville
 C. Beaumont
 D. St. Louis
47. What Canadian city is located on Lake Athabasca?
 A. Grand Rapids
 B. Winnipeg
 C. Mackenzie
 D. Fond-du-Lac
48. About how many miles is it from Dallas to Denver?
 A. 500 miles
 B. 580 miles
 C. 675 miles
 D. 750 miles
49. Which Central American capital city lies on Lake Nicaragua?
 A. San Jose
 B. San Salvador
 C. Managua
 D. Guatemala City
50. How many degrees north of the Arctic Circle is Resolute, Canada?
 A. 5° B. 8.5°
 C. 20° D. 35°
51. Which natural resource can be found in Cuba?
 A. tin B. manganese
 C. lead D. iron
52. The capital of the Dominican Republic is located on which of the island's coasts?
 A. north B. south
 C. east D. west
53. According to the political relief map of Mexico, which Mexican state is indicated by number 10?
 A. Puebla B. Hidalgo
 C. Tlaxcala D. Tabasco
54. Hawaii has what type of climate?
 A. tropical rain forest
 B. savanna
 C. steppe
 D. humid subtropical
55. The Turks and Caicos Islands are located in what body of water?
 A. Caribbean Sea
 B. Gulf of Mexico
 C. Pacific Ocean
 D. Atlantic Ocean
56. Which U.S. city is located in a major hurricane landfall area?
 A. Dallas
 B. Omaha
 C. Biloxi
 D. Ft. Worth
57. The Aleutian Islands are a chain of islands that separate the Pacific Ocean from what body of water?
 A. Bering Sea
 B. Queen Charlotte Sound
 C. Hecate Strait
 D. Monterey Bay
58. Over 50 percent of Canada's Gross Domestic Product (GDP) comes what sector?
 A. manufacturing
 B. wholesale and retail trade
 C. agriculture, forestry and fishing
 D. services and government
59. What is the predominant land cover and elevation of Mexico's Yucatan Peninsula?
 A. cropland
 B. grassland
 C. tropical rain forest
 D. semi-desert & desert
60. Which state is considered part of the southeastern U.S.?
 A. Indiana B. Georgia
 C. New Mexico D. Arkansas